

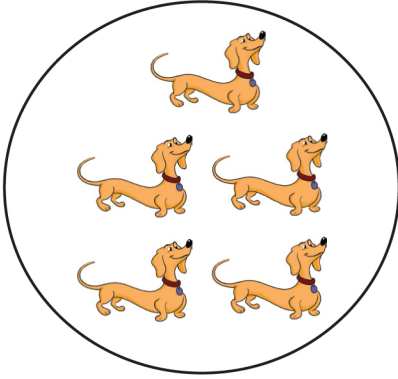


Count the Animals

Is it hard to count all these animals? Try circling different animal groups and then adding the groups!



5 dogs

+ pigeons

+ bunnies

+ squirrels

 animals
in all