


# Counting Eggs


Gossie and her friends find lots of eggs around the farmyard.  
Can you count them?




$$\underline{\quad\quad} \text{ eggs} + \underline{\quad\quad} \text{ egg} = \underline{\quad\quad} \text{ eggs}$$



$$\underline{\quad\quad} \text{ egg} + \underline{\quad\quad} \text{ egg} + \underline{\quad\quad} \text{ egg} = \underline{\quad\quad} \text{ eggs}$$




$$\underline{\quad\quad} \text{ eggs} - \underline{\quad\quad} \text{ eggs} = \underline{\quad\quad} \text{ eggs}$$



$$\underline{\quad\quad} \text{ egg} - \underline{\quad\quad} \text{ egg} = \underline{\quad\quad} \text{ eggs}$$

**Bonus!** How many eggs does Ollie have?



$$\underline{\quad\quad} \text{ eggs} + \underline{\quad\quad} \text{ egg} + \underline{\quad\quad} \text{ egg} + \underline{\quad\quad} \text{ egg} + \underline{\quad\quad} \text{ egg} = \underline{\quad\quad} \text{ eggs}$$